


Name _____

Date _____

1. Tim has 6 socks. Draw the socks. Circle the pairs.




How many pairs of socks does Tim have? _____ pairs of socks

2. Write the numbers that are one less and one more.

_____, 8, _____ _____, 16, _____ _____, 29, _____

3. Measure this line segment using pennies. _____ pennies



4. Finish this shape pattern.

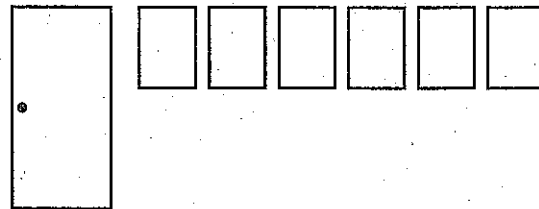


5. Color the fourth poster from the door red.

How many posters are on the right side of the red poster? _____ posters

How many posters are on the left side of the red poster? _____ posters

Color the second poster from the door yellow.



6. Write the answers.

$5 + 2 = \underline{\hspace{2cm}}$

$6 - 0 = \underline{\hspace{2cm}}$

$1 + 6 = \underline{\hspace{2cm}}$

$4 - 1 = \underline{\hspace{2cm}}$

$8 + 2 = \underline{\hspace{2cm}}$

$8 + 8 = \underline{\hspace{2cm}}$

This page may not be reproduced without permission of Harcourt Achieve Inc.